

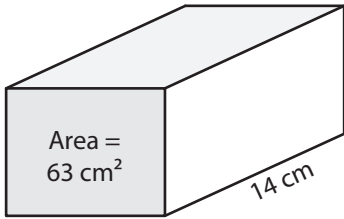
Name : _____

Volume - Rectangular Prism

Integers: S1

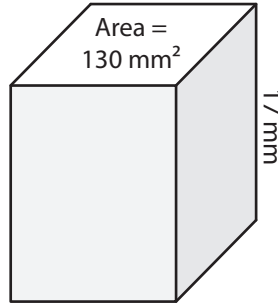
Find the volume of each rectangular prism.

1)



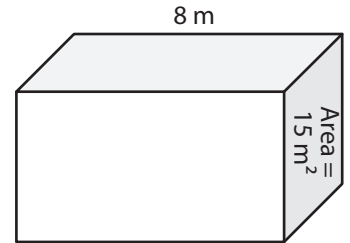
Volume = _____

2)



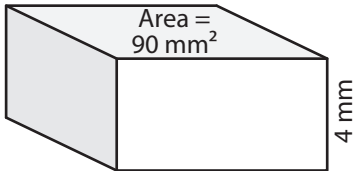
Volume = _____

3)



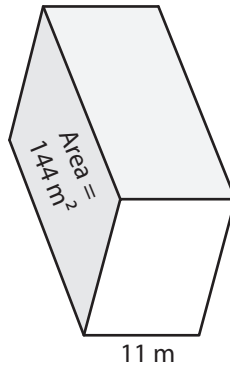
Volume = _____

4)



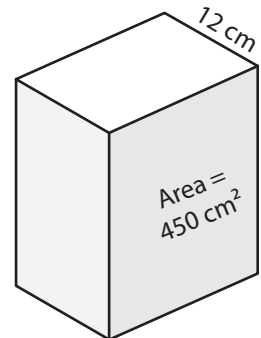
Volume = _____

5)



Volume = _____

6)



Volume = _____

7) A rectangular prism has a height of 22 m and a base with area of 152 m². What is its volume?

8) Find the volume of the rectangular prism with a base area of 13 cm² and a height of 7 cm.

Name : _____

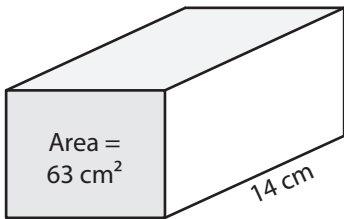
Answer key

Volume - Rectangular Prism

Integers: S1

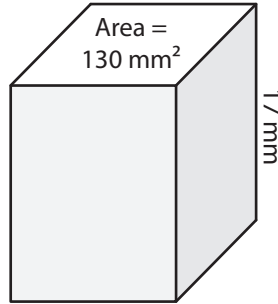
Find the volume of each rectangular prism.

1)



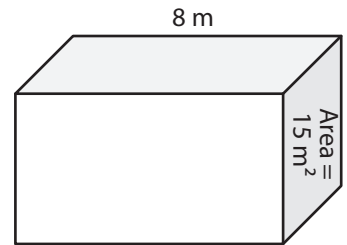
Volume = 882 cm³

2)



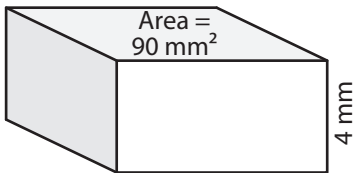
Volume = 2,210 mm³

3)



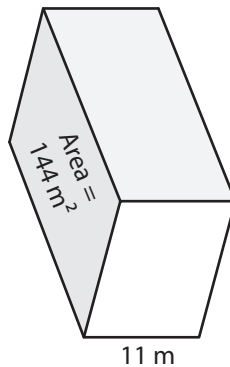
Volume = 120 m³

4)



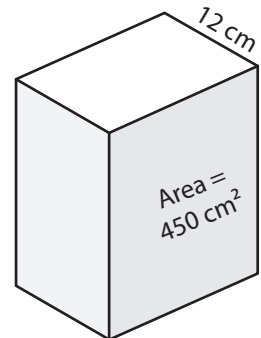
Volume = 360 mm³

5)



Volume = 1,584 m³

6)



Volume = 5,400 cm³

7) A rectangular prism has a height of 22 m and a base with area of 152 m². What is its volume?

3,344 m³

8) Find the volume of the rectangular prism with a base area of 13 cm² and a height of 7 cm.

91 cm³